


Blank

# The Hundred Square



## The Hundred Square

1	2	3	4	5	6	7	8	9	10
11	12	13	14	15	16	17	18	19	20
21	22	23	24	25	26	27	28	29	30
31	32	33	34	35	36	37	38	39	40
41	42	43	44	45	46	47	48	49	50
51	52	53	54	55	56	57	58	59	60
61	62	63	64	65	66	67	68	69	70
71	72	73	74	75	76	77	78	79	80
81	82	83	84	85	86	87	88	89	90
91	92	93	94	95	96	97	98	99	100


# The hundred square

Write the missing numbers on the 100 square. Then use the 100 square to fill in the missing numbers in the different sections.

1.


1	2		4	5				9	
11		13						18	20
	22			25		27		29	
31			34		36				40
		43		45				48	
51			54			57			
	62	63						68	70
71					76			79	
	82		84			87			
		93						98	100

2.




2		4
	13	
22		24

3.



		9
	18	
27		

4. (a) 

	25	

 (b) 


	48	

 (c) 


	57	

 (d) 


	79	

5. (a) 

	83	

 (b) 

	85	





 (c) 





	57		




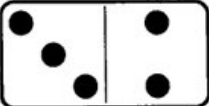


# Dice and dominoes





**Dice roll:** Write the biggest and smallest numbers that can be made from these dice. Write the **biggest** number first.

1. (a)  (b)  (c)  (d) 

2. (a)  (b)  (c)  (d) 

**Domino numbers:** Write the biggest and smallest numbers that can be made from these dominoes. Write the **smallest** number first.

3. (a)  (b)  (c)  (d) 

4. (a)  (b)  (c)  (d) 

**Challenge**  was the biggest dice number made.  
 was the smallest domino number made.



1. Fill in the missing numbers in these sections of the 100 square.

(a) 

17		
		29
	38	

 (b) 

	24	

 (c) 

		13

 (d) 

16		

(e) 

22				
	33			
			45	

 (f) 

33						
						49
			56			

(g) 

42				
				66


 (h) 

65			
			98

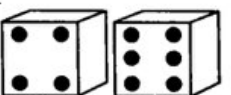
 (i) 

		56	
	75		

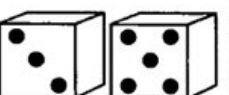
2. Write the biggest and smallest numbers that can be made from these dice.

(a) 


--	--

 (b) 

--	--


 (c) 

--	--


 (d) 

--	--

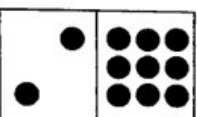
3. Write the biggest and smallest numbers that can be made from these dominoes.

(a) 


--	--

 (b) 

--	--

 (c) 

--	--

 (d) 

--	--