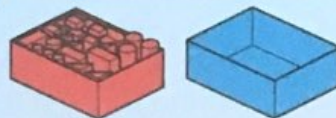


Full/empty



Colour the full containers **red**. Colour the empty containers **blue**.

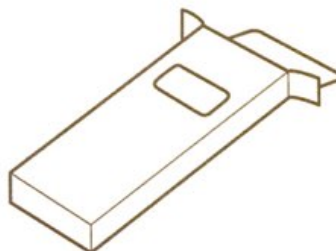
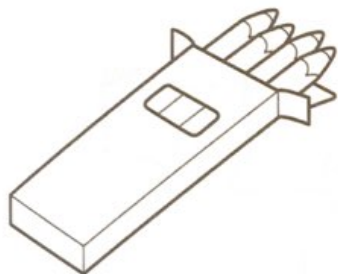
a



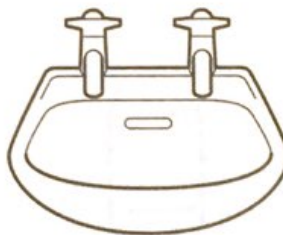
b



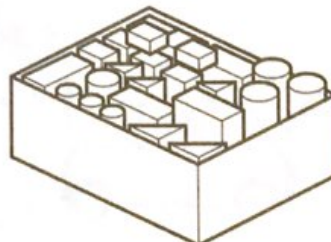
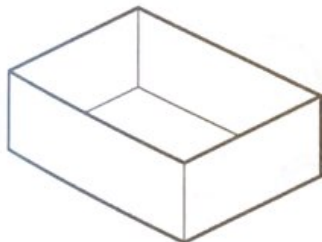
c



d



e

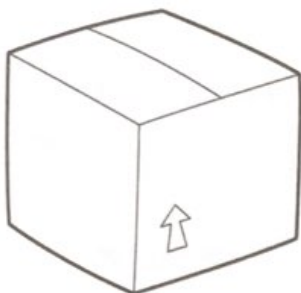


Holds more/holds less



Colour the objects that hold more.


a



b




c



d



e



holds most/holds least

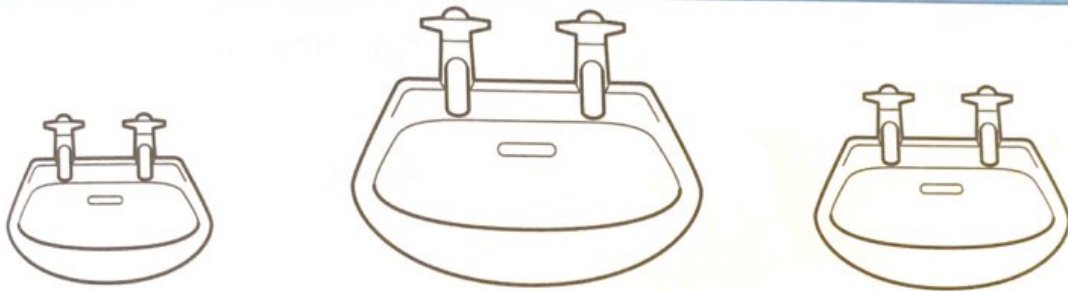


Colour the containers that hold the most **yellow**. Colour the containers that hold the least **pink**.


a



b



c



d



e



How many cupfuls?



Estimate (guess) how many cupfuls each object holds. **Measure. Write.**

a



How many cupfuls does the bowl hold?

my estimate: about cupfuls

measure: about cupfuls

b



How many cupfuls does the teapot hold?

my estimate: about cupfuls

measure: about cupfuls

c



How many cupfuls does the bottle hold?

my estimate: about cupfuls

measure: about cupfuls

d



How many cupfuls does the pot hold?

my estimate: about cupfuls

measure: about cupfuls

Write.

The _____ holds most.

The _____ holds least.

