



Count - In twos

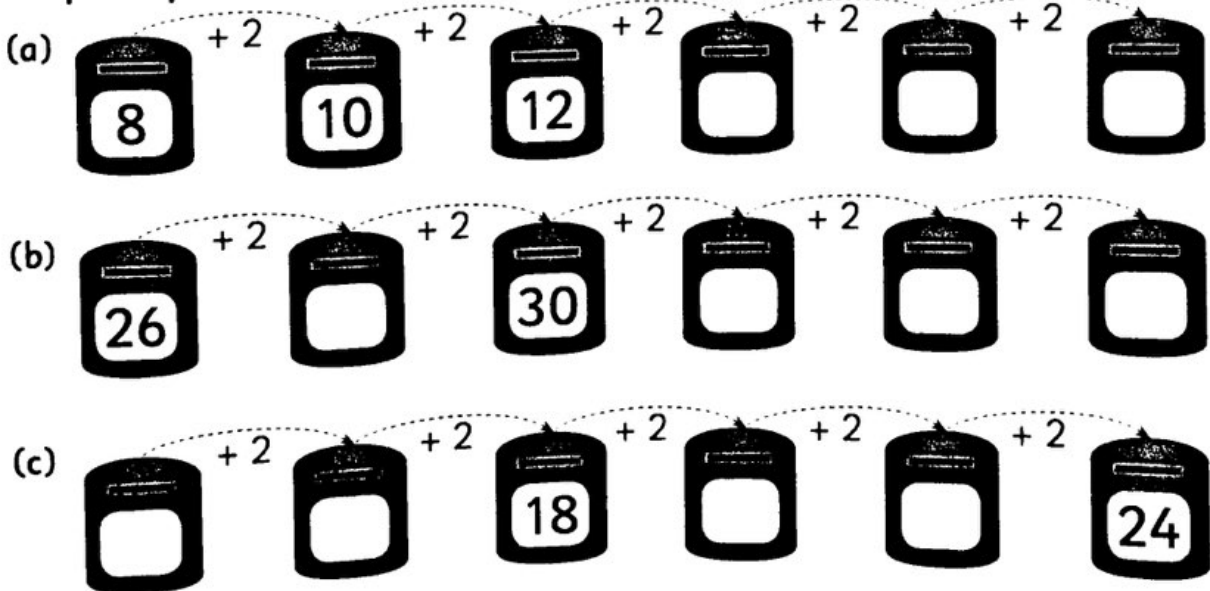
1. Count the animals in twos. Fill in the missing numbers.



2. Count the animals in twos. Fill in the missing numbers.



3. Help the postman fill in the missing numbers on the post boxes.




Count – In fives

1. Help Iggy count the fish in fives. Fill in the missing numbers.



2. Now help Iggy count the flowers in fives.



3. How much money has Iggy? Count in fives.



4. Answer these questions.

(a) What is 5 less than 25? (b) What is 5 more than 55?

(c) When you count in fives, all the numbers end with _____ or _____.

(d) Count in fives. Circle the numbers you say:

⑤ 15 23 30 35 42 45 49 55 62 65

Challenge

There are 4 clowns.



Each clown has 5 balls.

There are balls altogether.



Count - In tens

1. Help Ziggy count the bottles in tens.



20


2. How much money has Ziggy? Count in tens.




30c

3. Write the number of dots shown in each of these.

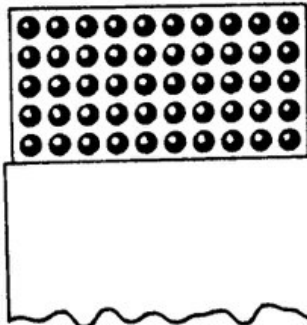
(a)



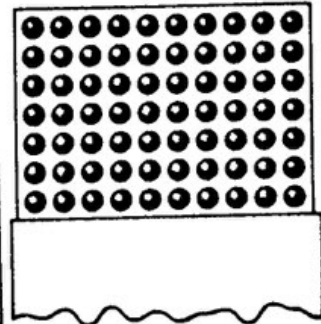
(b)



(c)



(d)



4. Answer the questions.

(a) What is 10 less than 40?

(b) What is 10 more than 10?

(c) Add 10 to 60.

(d) Add 10 to 30.

(e) When you count in tens, all of the numbers end in

(f) Count in tens. Circle the numbers you say:

10 20 36 50 71 80 84 87 90 96