
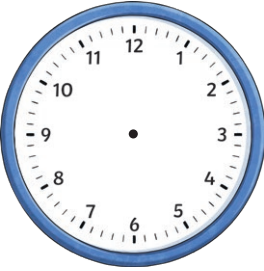

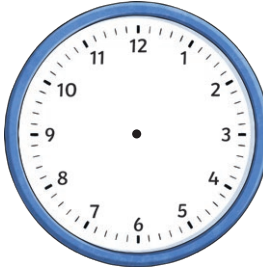


















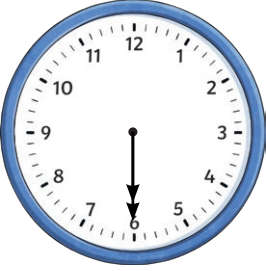






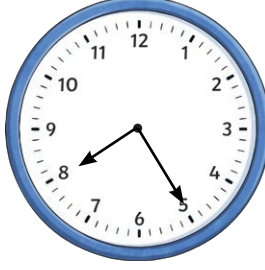












Analogue and Digital Time

Draw the hands on the clock to show the time.

 04:20	 02:15	 05:25	 07:25
 06:30	 09:25	 12:15	 03:30
 12:10	 08:05	 03:00	 06:45
 03:40	 11:55	 07:05	 02:20
 11:00	 06:35	 09:10	 12:00




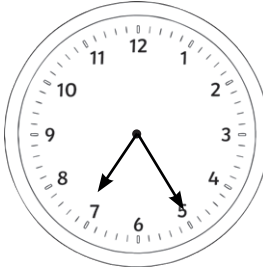
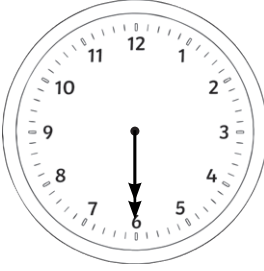
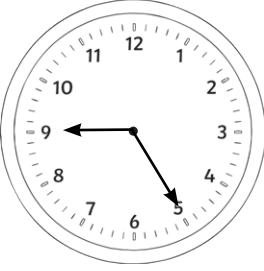

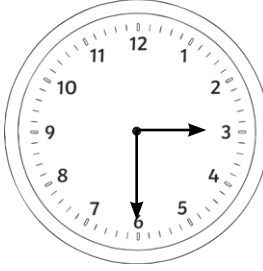
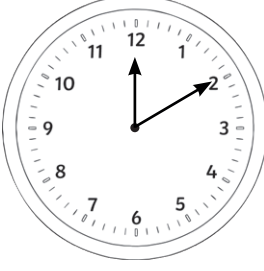
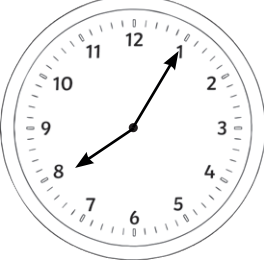
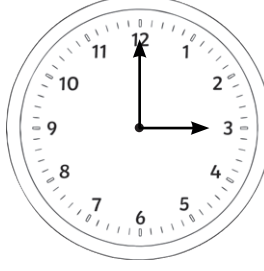
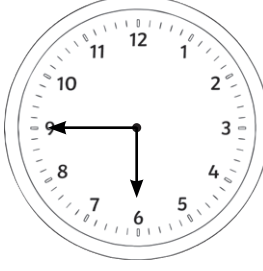


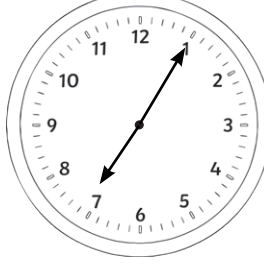
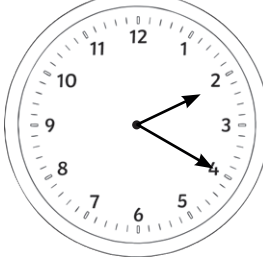

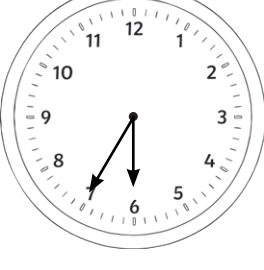


Analogue and Digital Time

Write the digital time under the clock.

 _____	 _____	 _____	 _____
 _____	 _____	 _____	 _____
 _____	 _____	 _____	 _____
 _____	 _____	 _____	 _____
 _____	 _____	 _____	 _____




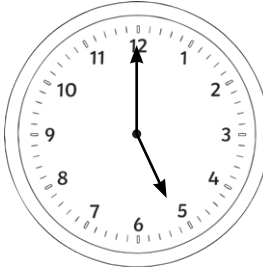
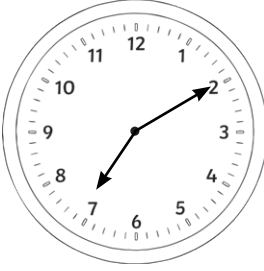


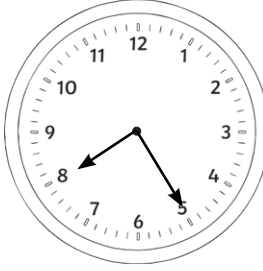



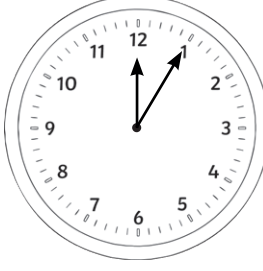
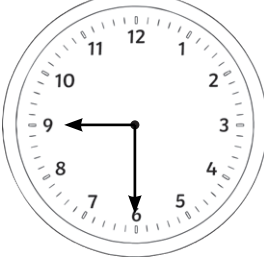



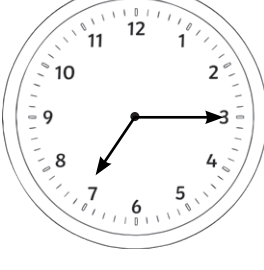



Analogue and Digital Time Answers

Draw the hands on the clock to show the time.

 <p>04:20</p>	 <p>02:15</p>	 <p>05:25</p>	 <p>07:25</p>
 <p>06:30</p>	 <p>09:25</p>	 <p>12:15</p>	 <p>03:30</p>
 <p>12:10</p>	 <p>08:05</p>	 <p>03:00</p>	 <p>06:45</p>
 <p>03:40</p>	 <p>11:55</p>	 <p>07:05</p>	 <p>02:20</p>
 <p>11:00</p>	 <p>06:35</p>	 <p>09:10</p>	 <p>12:00</p>

Analogue and Digital Time Answers

Write the digital time under the clock.

 <p>06:30</p>	 <p>12:15</p>	 <p>11:45</p>	 <p>05:00</p>
 <p>07:10</p>	 <p>04:05</p>	 <p>01:20</p>	 <p>08:25</p>
 <p>07:00</p>	 <p>02:15</p>	 <p>10:55</p>	 <p>12:05</p>
 <p>09:30</p>	 <p>01:00</p>	 <p>09:10</p>	 <p>03:50</p>
 <p>07:15</p>	 <p>11:55</p>	 <p>12:30</p>	 <p>03:20</p>